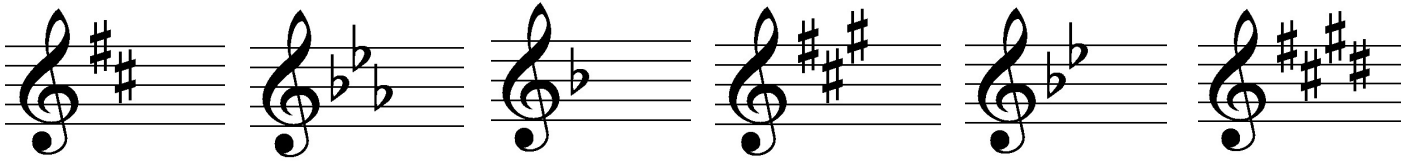


Minor Key Signatures (4) b

1. Name these **major** key signatures:

Clues: Sharps - it's a semitone higher than the last sharp. Flats - it's the second from last flat.




2. Name these **minor** key signatures:


Hint: work out which major key shares this key signature, then work out which note is 6th in that major scale.



3. Draw these **major** key signatures:



4. Draw these **minor** key signatures:



5. Fill in the gaps!

The relative minor of G major is _____

The 6th note in a D major scale is _____

The relative major of A minor is _____

The 3rd note in a D minor scale is _____

The 6th note in an A major scale is _____